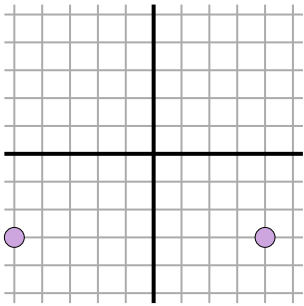




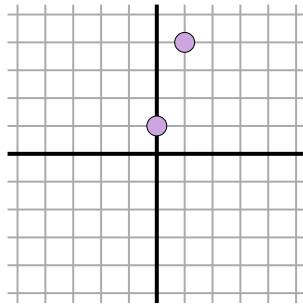
Find the distance between points. Round your answer to the nearest tenth.

Answers

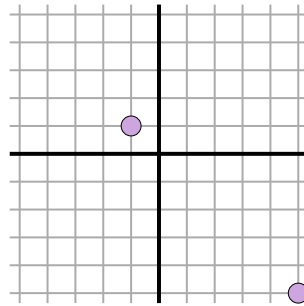
Ex)



1)



2)



Ex. 9

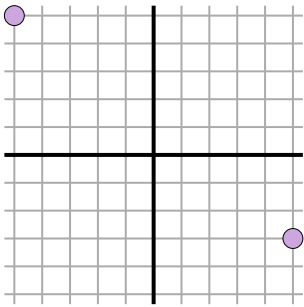
1. \_\_\_\_\_

2. \_\_\_\_\_

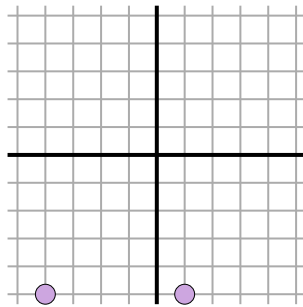
3. \_\_\_\_\_

4. \_\_\_\_\_

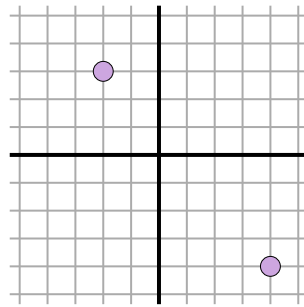
3)



4)



5)



5. \_\_\_\_\_

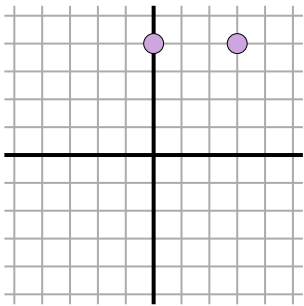
6. \_\_\_\_\_

7. \_\_\_\_\_

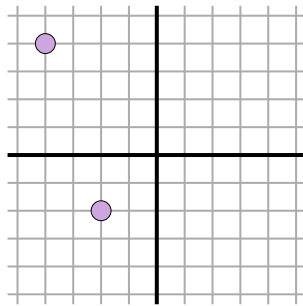
8. \_\_\_\_\_

9. \_\_\_\_\_

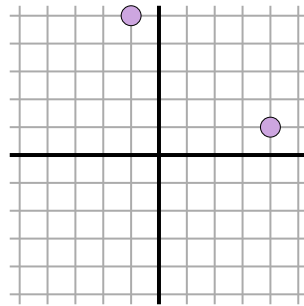
6)



7)



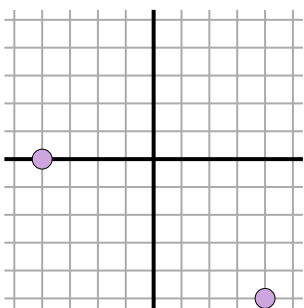
8)



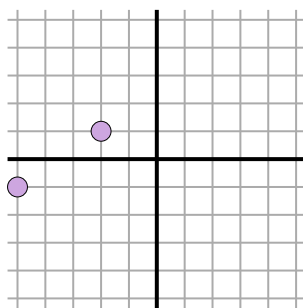
10. \_\_\_\_\_

11. \_\_\_\_\_

9)



10)



11)

